

Name:

Period:



Communication



Successful Partnership



Encouragement



Solving Problem Together

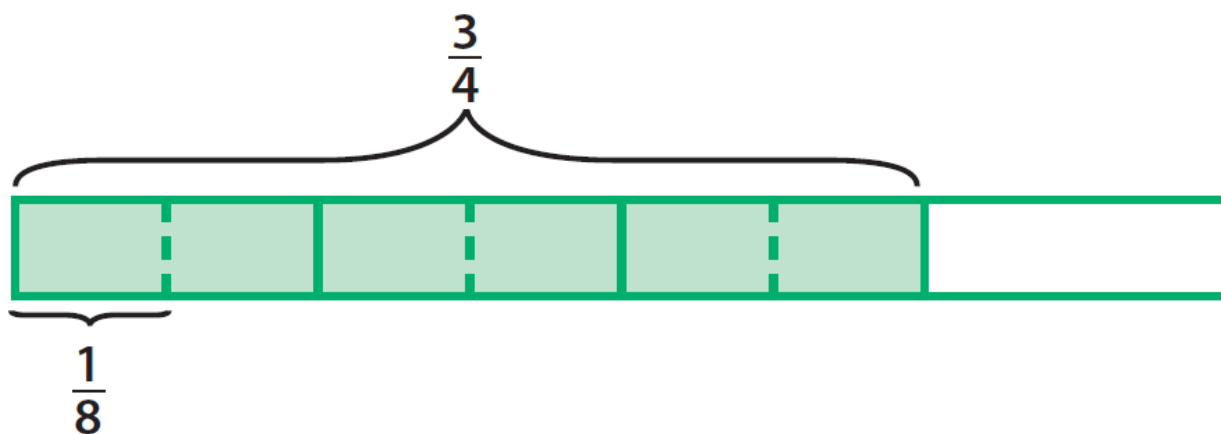


Collaboration

Part 1-5 Classwork

No Calculators

Question 01



Part A: Select the equation modeled above.

$$\frac{3}{4} \div \frac{6}{8} =$$

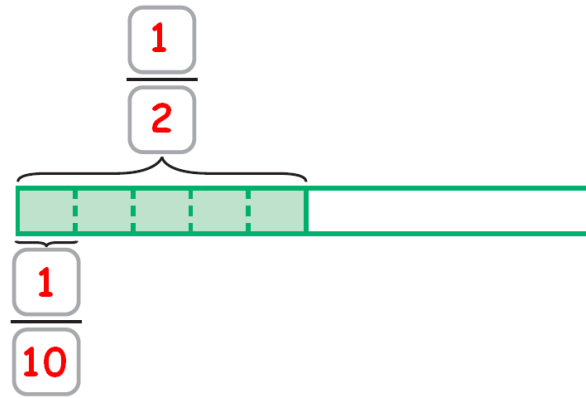
$$\frac{3}{4} \div \frac{1}{4} =$$

$$\frac{3}{4} \div \frac{1}{6} =$$

$$\frac{3}{4} \div \frac{1}{8} =$$

Part B: Write the solution to the equation \rightarrow _____

Question 02



Part A: Select the equation modeled above.

$$\frac{1}{2} \div 10 =$$

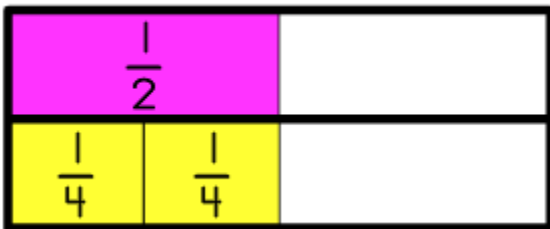
$$\frac{1}{2} \div \frac{1}{10} =$$

$$2 \div 10 =$$

$$\frac{1}{10} \div \frac{1}{2} =$$

Part B: Write the solution to the equation \rightarrow _____

Question 03



Part A: Select the equation modeled above.

$$\frac{1}{2} \div \frac{2}{4} =$$

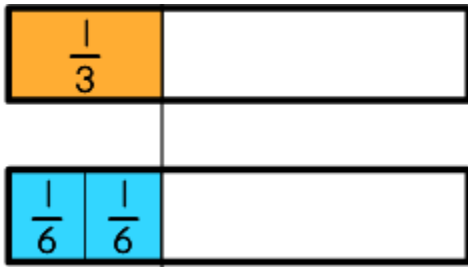
$$\frac{1}{2} \div \frac{1}{4} =$$

$$\frac{1}{4} \div \frac{1}{2} =$$

$$\frac{2}{4} \div \frac{1}{2} =$$

Part B: Write the solution to the equation \rightarrow _____

Question 04



Part A: Select the equation modeled above.

$$\frac{1}{6} \div \frac{1}{3} =$$

$$\frac{2}{6} \div \frac{1}{3} =$$

$$\frac{1}{3} \div \frac{2}{6} =$$

$$\frac{1}{3} \div \frac{1}{6} =$$

Part B: Write the solution to the equation \rightarrow _____

Question 05



Part A: Select the equation modeled above.

$$\frac{2}{3} \div \frac{1}{6} =$$

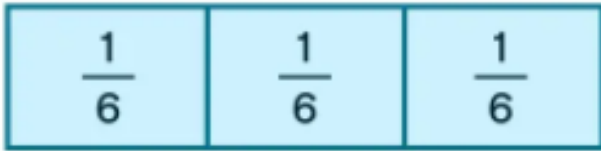

$$\frac{1}{6} \div \frac{2}{3} =$$

$$\frac{1}{3} \div \frac{1}{6} =$$

$$\frac{2}{3} \div 6 =$$

Part B: Write the solution to the equation \rightarrow _____

Question 06



Part A: Select the equation modeled above.

$1 \div 6 =$

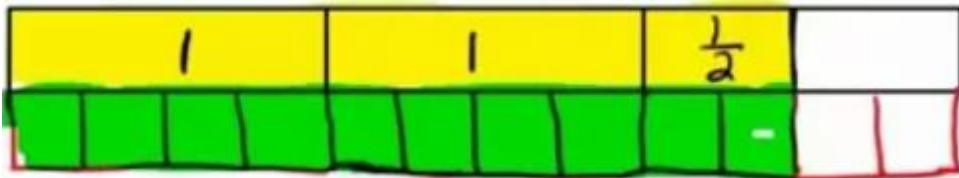
$1 \div \frac{1}{6} =$

$\frac{1}{2} \div \frac{6}{1} =$

$\frac{1}{2} \div \frac{1}{6} =$

Part B: Write the solution to the equation \rightarrow _____

Question 07



Part A: Select the equation modeled above.

$2\frac{1}{2} \div 4 =$

$2\frac{1}{2} \div \frac{1}{10} =$

$2\frac{1}{2} \div \frac{1}{4} =$

$2\frac{1}{2} \div \frac{1}{8} =$

Part B: Write the solution to the equation \rightarrow _____