

Name:

Period:



# HOMEWORK

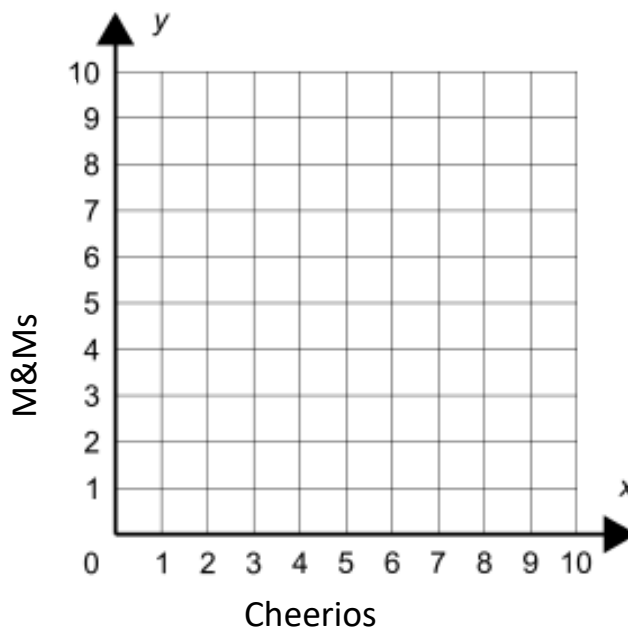
## Part 2-9 Homework

Calculators OK

Question 01

A trail mix recipe calls for 2 cups of M&Ms for every 3 cups of Cheerios. Draw a graph of this proportional relationship with M&Ms on the  $y$ -axis and Cheerios on the  $x$ -axis.

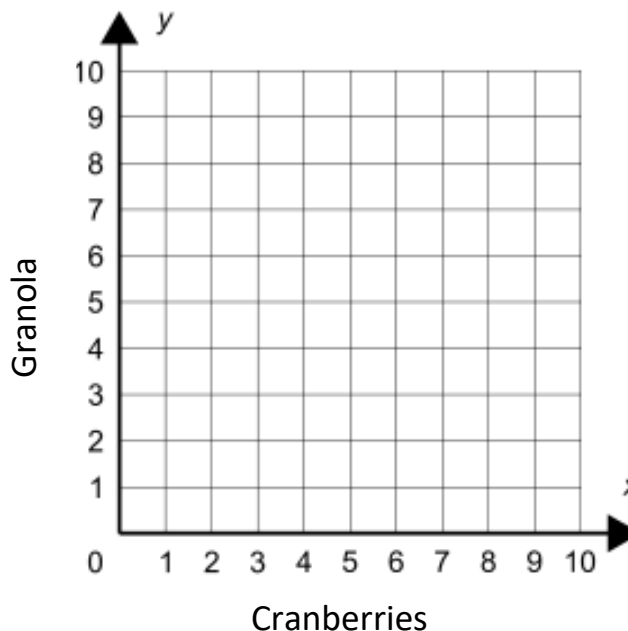
$y$ -axis	2	4
$x$ -axis	3	6



Question 02

A trail mix recipe calls for 4 cups of granola for every 1 cup of cranberries. Draw a graph of this proportional relationship with granola on the  $y$ -axis and cranberries on the  $x$ -axis.

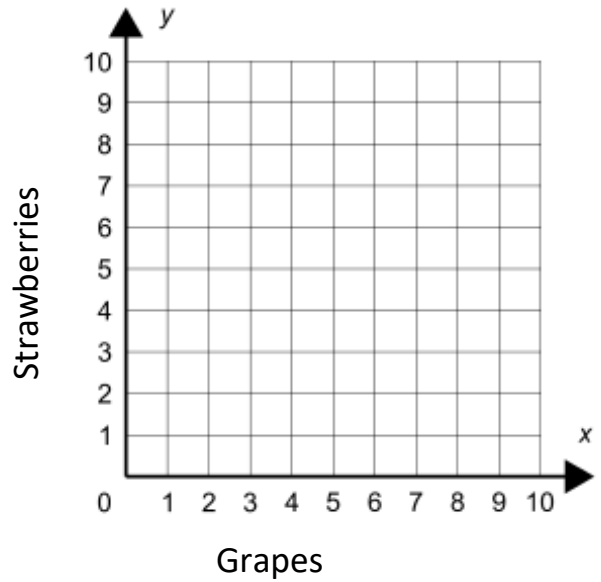
$y$ -axis	4	8
$x$ -axis	1	2



Question 03

A fruit salad recipe calls for 5 cups of strawberries for every 4 cups of grapes. Draw a graph of this proportional relationship with strawberries on the  $y$ -axis and grapes on the  $x$ -axis.

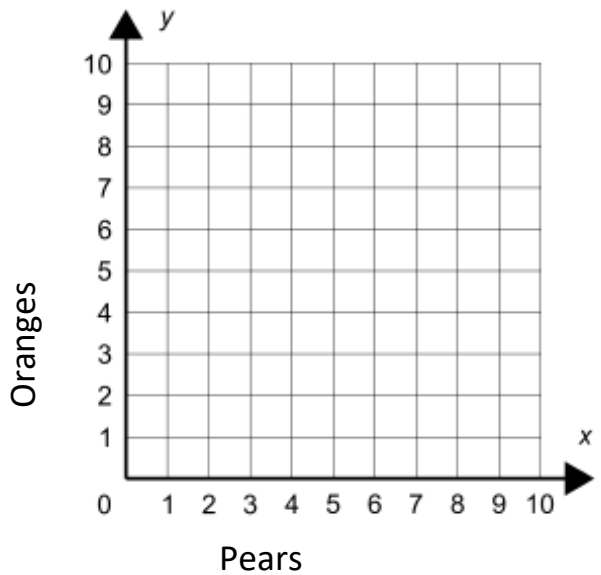
$y$ -axis	5	10
$x$ -axis	4	8



Question 04

A fruit salad recipe calls for 1 cup of oranges for every 3 cups of pears. Draw a graph of this proportional relationship with oranges on the  $y$ -axis and pears on the  $x$ -axis.

$y$ -axis	1	3
$x$ -axis	3	9



Question 05

A fruit salad recipe calls for 3 cups of bananas for every 4 cups of cherries. Draw a graph of this proportional relationship with bananas on the  $y$ -axis and cherries on the  $x$ -axis.

$y$ -axis	3	6
$x$ -axis	4	8

